


Draw the hand on the Clock.



15:15



17:55



23:00

What time is it ?












It's quarter past twelve.




It's ten minutes to four.





It's twenty minutes to six.

Draw the hand on the Clock.



15:15



17:55



23:00

What time is it ?



ten minutes to

six



quarter past

eleven



half past

two



12:15

It's quarter past twelve.



3:50

It's ten minutes to four.



5:40

It's twenty minutes to six.