


# Data Handling

**Question 1:** A survey is conducted to find student's favourite sports. The options are Football, Basketball, Cricket, and Tennis. Record the following data using tally marks

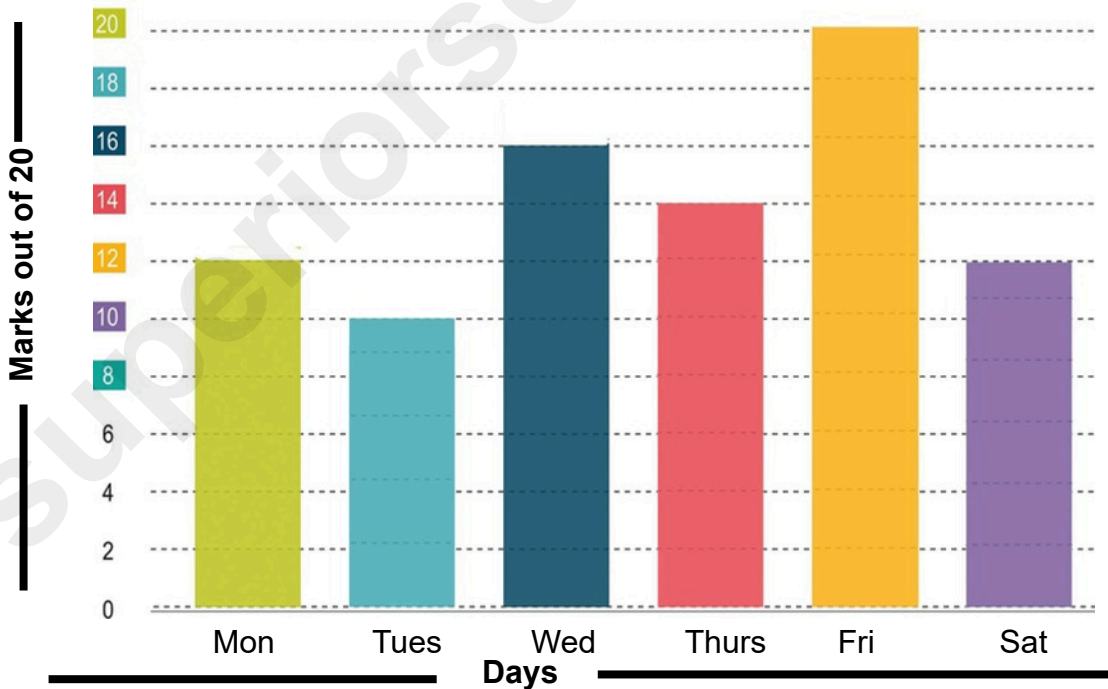
Football: 7 votes, Basketball: 12 votes, Cricket: 9 votes, Tennis: 4 votes

**Question 2:** The following data shows the number of books read by students in a week:

Student	Number of Books
Rohit	4
Anuj	6
Siya	8
Diya	2

Create a pictograph where each  represents 2 books.

**Question 3:** The bar chart below show a student's marks in Maths tests given on each day of the same week.



Days	Mon	Tues	Wed	Thurs	Fri	Sat
Marks						

Ques- On which day student got the maximum marks?

Ques- On which day student got the minimum marks?





Ques- On which days student got the same marks?

# Data Handling

Answer 1:

SPORTS	TALLY MARKS	COUNT
Football		7
Basket Ball		12
Cricket		9
Tennis		4

Answer 2:

Student	Number of Books
Rohit	
Anuj	
Siya	
Diya	

Answer 3:

Days	Mon	Tues	Wed	Thurs	Fri	Sat
Marks	12	10	16	14	20	12

Ans- On Friday student got the maximum marks.

Ans- On Tuesday student got the minimum marks.

Ans- On Monday and Saturday student got the same marks.